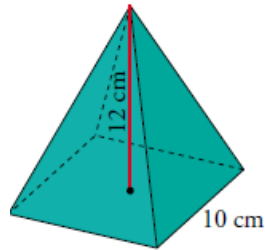
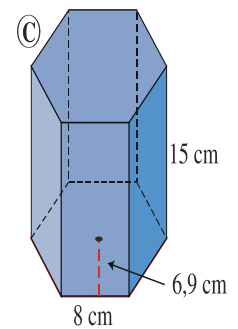
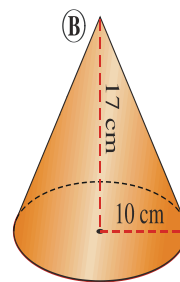
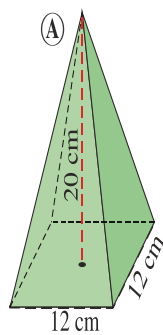
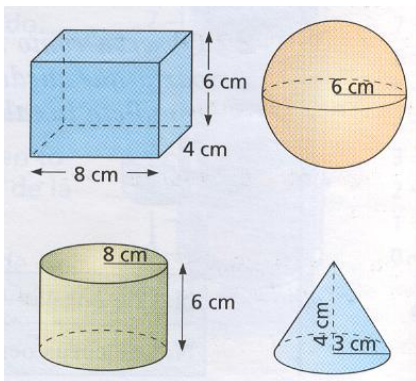


1. Halla el área total de una pirámide regular cuya base es un cuadrado de 10 cm de lado y cuya altura es de 12 cm.

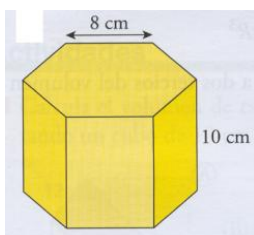


2. Calcula el área total y el volumen de los siguientes cuerpos geométricos.

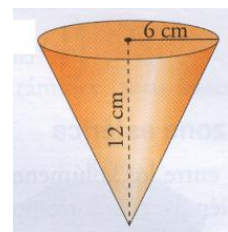
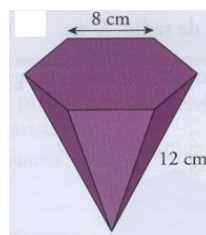


3. Calcula el área de las siguientes figuras

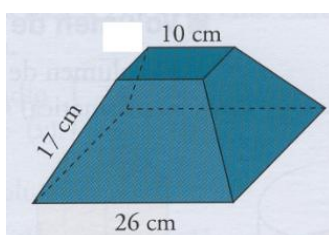
3.1.) 3.2.)



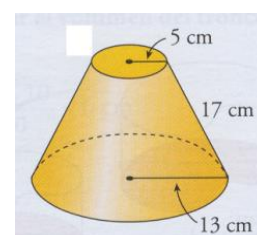
3.3.)



3.4.)



3.5.)



4.) Calcula el volumen de las figuras de los apartados 3.1); 3.2) y 3.3.)